








I. Choose the picture with 4/2 monostable valve.



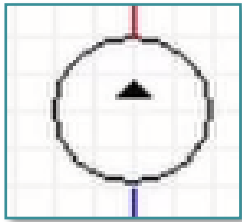
II. Choose the picture with the hydraulic double-acting cylinder.



III. Choose the picture with spring loaded check valve.



IV. Write the name of the element depicted by this symbol.



V. Choose the option that correctly describes the function of a spring-loaded check valve.

- It determines the direction of a hydraulic oil flow.
- It protects the hydrogenerator from the reverse flow of hydraulic oil.
- It ensures the pressing and moving operations in hydraulics.

VI. Photo credits: STEP IN partnership

VII. Notes:

STEP IN to the online world/virtual learning, Facilitation of access to Vocational practice through online teaching at secondary technical schools

The project is co-financed by the European Union, ERASMUS+ programme.

Contract number: 2020-1-SK01-KA226-VET-094400

The European Commission's support for the production of this material does not constitute an endorsement of the contents, which reflect the views only of the authors, and the Commission cannot be held responsible for any use which may be made of the information contained therein.

STEP IN project in partnership with:

